



Les 6



Lessen

1

**bedenk de sommen.**

som: ..... + ..... = .....  
 ..... stippen

som: ..... + ..... = .....  
 ..... stippen

som: ..... + ..... = .....  
 ..... stippen

som: ..... + ..... = .....  
 ..... stippen

som: ..... + ..... = .....  
 ..... stippen

som: ..... + ..... = .....  
 ..... stippen

2

**bedenk de sommen.**

som: ..... - ..... = .....  
 ..... appels

som: ..... - ..... = .....  
 ..... appels

som: ..... - ..... = .....  
 ..... appels

som: ..... - ..... = .....  
 ..... appels

som: ..... - ..... = .....  
 ..... appels

som: ..... - ..... = .....  
 ..... appels

som: ..... - ..... = .....  
..... appels

som: ..... - ..... = .....  
..... appels

som: ..... - ..... = .....  
..... appels

ga naar 

 les 6

instapoefening

## Les 7



Lessen

1

bedenk en teken de verhalen.

$$4 + 2 = \dots\dots$$

$$5 + 4 = \dots\dots$$

2

bedenk en teken de verhalen.

$$4 - 3 = \dots\dots$$

$$7 - 5 = \dots\dots$$

ga naar 

 les 7

instapoefening

## Les 13



Lessen

1

**waar zie je hetzelfde?**

welke blijft over?

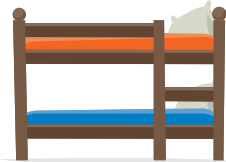
teken dat van opzij.



•



•




•



•



•



•



•



•



•



•



•



•




•



•




•



•

2

wat zie je?





kijk terug

wie ziet wat?

